

Formative Assessment - 3

Class: 4th

Subject: తెలుగు

	I	II	III	IV	Total
Marks					
Grade					

విద్యార్థి పేరు:

క్రమసంఖ్య:

I. కింది పదాలను పరిశీలించండి. నామవాచక పదాలకు సరిపోయే సర్వనామ పదాలు గుర్తించండి. వాటిని జతపరచండి.

గోపాల్	అవి
సుల్తానా	అది
కాకి	వారు
నక్క, కుక్క, తాబేలు	ఆమె
రవి, రహీం, సునీల్	అతడు

II. కింది వాక్యాలు చదవండి. విశేషణ పదాల కింద గీత గీయండి.

అ) ఏనుగు పెద్ద జంతువు.

ఆ) నిఖల్ పాడవుగా ఉన్నాడు.

ఇ) బిలుక అందమైన పక్షి.

ఈ) కాటుక నల్లగా ఉంటుంది.

ఉ) అత్తరు వాసన మంచిగా ఉంటుంది.

III. “బిన్నారి కల” పాఠంలోని పాప పేరు ప్రజ్ఞ కదా! “ప్రజ్ఞ” పేరులో “జ్ఞ” అనే అక్షరం ఉన్నది కదా! ఇట్లు “జ్ఞ” ఉన్న పదాలు మరికొన్ని రాయండి.

.....

IV. కింది పదాలు చదవండి. ఏవైనా రెండు పదాలు ఉపయోగించి వాక్యాలు రాయండి.

పుస్తకాలు	కాగితం	చెత్తబుట్ట	ప్లాస్టిక్	భూమి
అవసరం	వినియోగం	రంగు	ముప్పు	కాపాడడం

1.
2.
3.
4.
5.

Formative Assessment - 3

Class: 4th

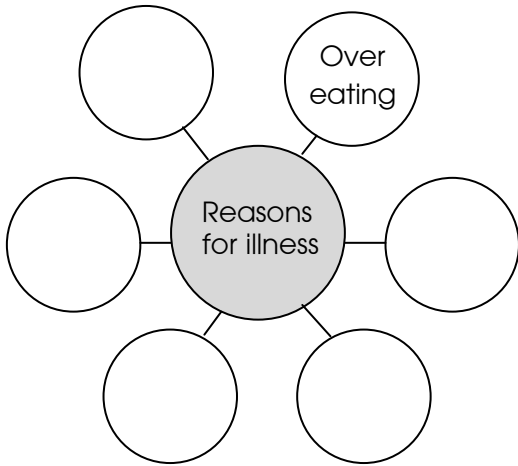
Subject: English

	I	II	III	IV	Total
Marks					
Grade					

Student Name :

Roll No. :

I. Akbar didn't eat anything the whole morning. He fell ill. What are the other reasons for people to fall ill ?



II. Complete the following paragraph using the hints from the brackets.

Ganesh packed his luggage and went to the railway station. By the time he..... (reach) the station, the train (come) to the platform. He searched his pocket. There was no ticket. He (understand) that he (forgot) to bring his ticket. He rang up to his wife. She (ask) what happened ? Then she advised him to take the ticket from the internet.

III. Read the descriptions of persons from the story "The Unlucky Face" and write their names in the space provided.

1. He was a merchant who lived in Delhi. _____
2. He was the emperor who ruled India. _____
3. He came to the king's court when Akbar fell ill. _____
4. He was ordered to drag Hirachand to be executed. _____
5. He was the wise minister at the King's court. _____

IV. Write a word or phrase for each of the following descriptions.

1. A group of people travelling together in a desert _____
2. A piece of cloth worn over the face for protection _____
3. Exchanging things with each other _____
4. A person who robs others or commits violence at sea or in a desert _____
5. An instrument for finding directions _____

	I	II	III	IV	Total
--	---	----	-----	----	-------

Formative Assessment – 3

Marks					
Grade					

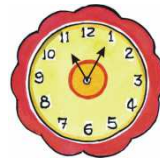
Class: 4th

Subject: Mathematics

Student Name :

Roll No. :

I. What is the time on these clocks ?



.....

.....

.....

.....

.....

II. Fill in the blanks given below and make it equal to 1 liter.

a) 500 ml + = 1 liter.

b) + 750 ml = 1 liter.


c) 900 ml + = 1 liter.

d) x 500 ml = 1 liter.

e) x 250 ml = 1 liter.

III. How many of these will you need to make a Kg ?

200 gm



.....

250 gm



.....

500 gm



.....

100 gm



.....

IV. Fill in the blanks with appropriate numbers.

a) 4 m. of ribbon = cm. of ribbon.

b) 9 m. of pipe = cm. of pipe.

c) 450 cm. of cloth = m. cm of cloth.

d) 750 cm. of rope = m. cm. of rope.

Formative Assessment - 3

Class: 4th

Subject: EVS

	I	II	III	IV	Total
Marks					
Grade					

Student Name :

Roll No.:

I. Observe the picture given below. Kasturi is standing in the middle facing the north



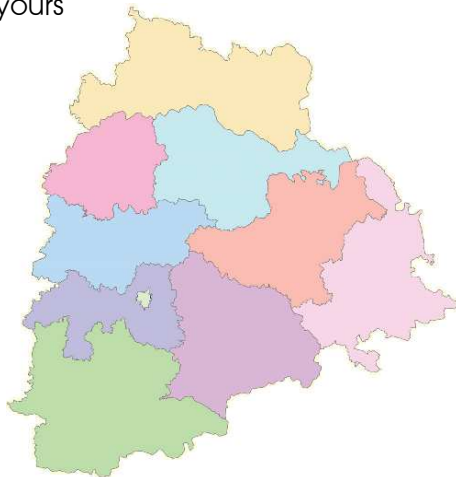
Write in which direction are the following to kasturi.

- The well is on the
- The bus-stop is on the
- The school is on the
- The mango tree is on the

II. Write what are the Public institution in Mandal level, its officers and their duties

Sl.No.	Name of Mandal level office	Designation of the officer	Nature of the duties
1.			
2.			
3.			
4.			
5.			

III. Write the name of your district in the Telangana map given here. Also write the names of the district adjacent to yours



IV. What is your district name? Where is it located? Whate are the different offeces located there?